

Mathematik

Zahlenraum bis 100

Kopiervorlagen mit Lösungen



Name: _____

Datum: _____

1. Fülle die Tabelle aus.

Strich-Punkt-Darstellung	Zehner und Einer	Aufgabe	Zahl				
	<table border="1"> <tr> <td>Z</td> <td>E</td> </tr> <tr> <td></td> <td></td> </tr> </table>	Z	E			___ + ___	74
Z	E						
	<table border="1"> <tr> <td>Z</td> <td>E</td> </tr> <tr> <td>4</td> <td>6</td> </tr> </table>	Z	E	4	6	___ + ___	
Z	E						
4	6						
	<table border="1"> <tr> <td>Z</td> <td>E</td> </tr> <tr> <td></td> <td></td> </tr> </table>	Z	E			50 + 2	
Z	E						
	<table border="1"> <tr> <td>Z</td> <td>E</td> </tr> <tr> <td></td> <td></td> </tr> </table>	Z	E			___ + ___	27
Z	E						
	<table border="1"> <tr> <td>Z</td> <td>E</td> </tr> <tr> <td></td> <td></td> </tr> </table>	Z	E			___ + ___	
Z	E						

2. Fülle die Tabelle mit zwei eigenen Zahlen aus.

Strich-Punkt-Darstellung	Zehner und Einer	Aufgabe	Zahl				
	<table border="1"> <tr> <td>Z</td> <td>E</td> </tr> <tr> <td></td> <td></td> </tr> </table>	Z	E			___ + ___	
Z	E						
	<table border="1"> <tr> <td>Z</td> <td>E</td> </tr> <tr> <td></td> <td></td> </tr> </table>	Z	E			___ + ___	
Z	E						



Name: _____

Datum: _____

1. Fülle die Tabelle aus.

Strich-Punkt-Darstellung	Zehner und Einer	Aufgabe	Zahl				
	<table border="1"> <tr> <td>Z</td> <td>E</td> </tr> <tr> <td>7</td> <td>4</td> </tr> </table>	Z	E	7	4	$\underline{70} + \underline{4}$	74
Z	E						
7	4						
	<table border="1"> <tr> <td>Z</td> <td>E</td> </tr> <tr> <td>4</td> <td>6</td> </tr> </table>	Z	E	4	6	$\underline{40} + \underline{6}$	46
Z	E						
4	6						
	<table border="1"> <tr> <td>Z</td> <td>E</td> </tr> <tr> <td>5</td> <td>2</td> </tr> </table>	Z	E	5	2	$50 + 2$	52
Z	E						
5	2						
	<table border="1"> <tr> <td>Z</td> <td>E</td> </tr> <tr> <td>2</td> <td>7</td> </tr> </table>	Z	E	2	7	$\underline{20} + \underline{7}$	27
Z	E						
2	7						
	<table border="1"> <tr> <td>Z</td> <td>E</td> </tr> <tr> <td>9</td> <td>0</td> </tr> </table>	Z	E	9	0	$\underline{90} + \underline{0}$	90
Z	E						
9	0						

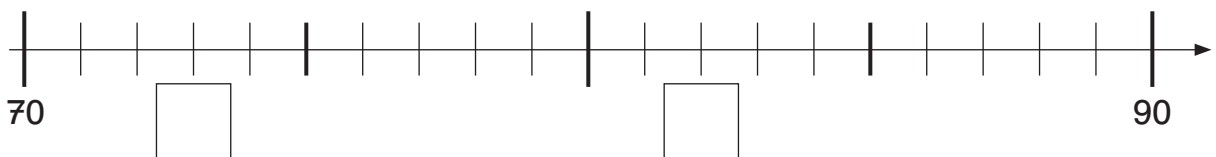
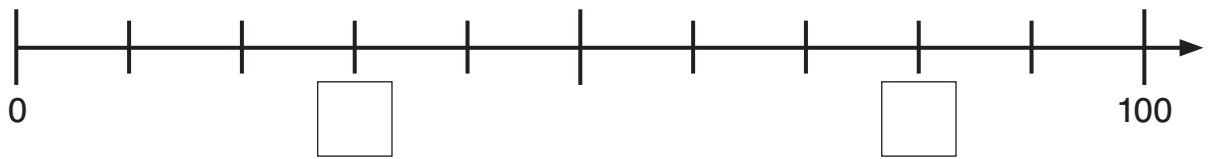
2. Fülle die Tabelle mit zwei eigenen Zahlen aus. **verschiedene Möglichkeiten**

Strich-Punkt-Darstellung	Zehner und Einer	Aufgabe	Zahl				
	<table border="1"> <tr> <td>Z</td> <td>E</td> </tr> <tr> <td></td> <td></td> </tr> </table>	Z	E			$\underline{\quad} + \underline{\quad}$	
Z	E						
	<table border="1"> <tr> <td>Z</td> <td>E</td> </tr> <tr> <td></td> <td></td> </tr> </table>	Z	E			$\underline{\quad} + \underline{\quad}$	
Z	E						



Name: _____

Datum: _____

1. Trage die passenden Zahlen ein.**2. Ergänze die fehlenden Zahlen.**

67	68					
----	----	--	--	--	--	--

55	54					
----	----	--	--	--	--	--

89						95
----	--	--	--	--	--	----

41			38			
----	--	--	----	--	--	--

26				30		
----	--	--	--	----	--	--

33						27
----	--	--	--	--	--	----

3. Ergänze die Tabelle.

ZV	V	Zahl	N	ZN
		37		
		78		
	26			
			64	
		40		

V = Vorgänger

N = Nachfolger

ZV = Zehner-Vorgänger

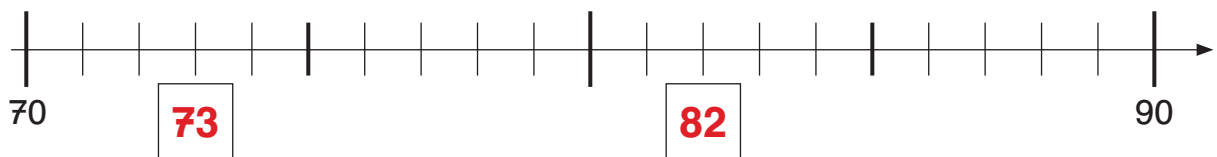
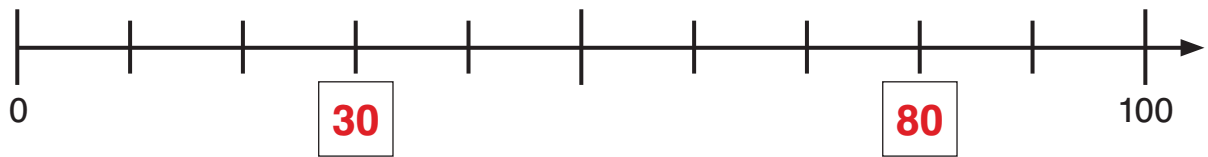
ZN = Zehner-Nachfolger



Name: _____

Datum: _____

1. Trage die passenden Zahlen ein.



2. Ergänze die fehlenden Zahlen.

67	68	69	70	71	72	73
----	----	-----------	-----------	-----------	-----------	-----------

55	54	53	52	51	50	49
----	----	-----------	-----------	-----------	-----------	-----------

89	90	91	92	93	94	95
----	-----------	-----------	-----------	-----------	-----------	----

41	40	39	38	37	36	35
----	-----------	-----------	----	-----------	-----------	-----------

26	27	28	29	30	31	32
----	-----------	-----------	-----------	----	-----------	-----------

33	32	31	30	29	28	27
----	-----------	-----------	-----------	-----------	-----------	-----------

3. Ergänze die Tabelle.

ZV	V	Zahl	N	ZN
30	36	37	38	40
70	77	78	79	80
20	26	27	28	30
60	62	63	64	70
30	39	40	41	50

V = Vorgänger

N = Nachfolger

ZV = Zehner-Vorgänger

ZN = Zehner-Nachfolger



Name: _____

Datum: _____

1. Finde diese Zahlen in der Hundertertafel und schreibe sie an die richtige Stelle: 22, 77, 43, 69, 90, 96

1									
							+		
			✿						
								■	
	✿								
			♥						
							★		100

2. Welche Zahlen stehen in diesen Feldern?

★ _____

✿ _____

✿ _____

♥ _____

■ _____

+ _____

2. Setze die richtigen Zeichen ein: >, =, <

55 ○ 78

65 ○ 46

45 ○ 45

49 ○ 94

29 ○ 27

71 ○ 69

3. Setze passende Zahlen ein.

45 > □

□ > 77

□ > 99

89 < □

78 = □

□ < 31



Name: _____

Datum: _____

1. Finde diese Zahlen in der Hundertertafel und schreibe sie an die richtige Stelle: 22, 77, 43, 69, 90, 96

1									
							+		
	22		✿						
		43						■	
	☼							69	
						77			
		♥							90
					96		★		100

2. Welche Zahlen stehen in diesen Feldern?

★ 98☼ 62✿ 24♥ 83■ 49+ 18

2. Setze die richtigen Zeichen ein: >, =, <

55 < 78

65 > 46

45 = 45

49 < 94

29 > 27

71 > 69

3. Setze passende Zahlen ein.

verschiedene Möglichkeiten

45 >

> 77

> 99

89 <

78 = 78

< 31



Name: _____

Datum: _____

1. Rechne die Aufgaben.

$60 + 30 = \underline{\quad}$

$80 + \underline{\quad} = 100$

$80 + 4 = \underline{\quad}$

$40 + 60 = \underline{\quad}$

$70 + \underline{\quad} = 100$

$70 + 7 = \underline{\quad}$

$30 + 50 = \underline{\quad}$

$30 + \underline{\quad} = 100$

$40 + 6 = \underline{\quad}$

2. Rechne die kleine und die große Aufgabe.

$6 + 2 = \underline{\quad}$



$26 + 2 = \underline{\quad}$

$4 + 3 = \underline{\quad}$

$7 + 2 = \underline{\quad}$

$5 + 4 = \underline{\quad}$

$54 + 3 = \underline{\quad}$

$37 + 2 = \underline{\quad}$

$75 + 4 = \underline{\quad}$

$1 + 8 = \underline{\quad}$

$3 + 5 = \underline{\quad}$

$6 + 3 = \underline{\quad}$

$81 + 8 = \underline{\quad}$

$83 + 5 = \underline{\quad}$

$96 + 3 = \underline{\quad}$

3. Finde die Tauschaufgabe und rechne anschließend aus.

$4 + 42 = \underline{\quad}$

$42 + 4 = \underline{\quad}$

$6 + 63 = \underline{\quad}$

$\underline{\quad} + \underline{\quad} = \underline{\quad}$

$5 + 54 = \underline{\quad}$

$\underline{\quad} + \underline{\quad} = \underline{\quad}$

4. Rechne die Aufgaben.

$22 + 11 = \underline{\quad}$

$27 + 51 = \underline{\quad}$

$14 + 83 = \underline{\quad}$

$54 + 32 = \underline{\quad}$

$43 + 35 = \underline{\quad}$

$23 + 24 = \underline{\quad}$

$64 + 24 = \underline{\quad}$

$75 + 22 = \underline{\quad}$

$57 + 42 = \underline{\quad}$

$36 + 33 = \underline{\quad}$

$46 + 43 = \underline{\quad}$



Name: _____

Datum: _____

1. Rechne die Aufgaben.

$60 + 30 = \underline{90}$

$80 + \underline{20} = 100$

$80 + 4 = \underline{84}$

$40 + 60 = \underline{100}$

$70 + \underline{30} = 100$


$70 + 7 = \underline{77}$


$30 + 50 = \underline{80}$

$30 + \underline{70} = 100$

$40 + 6 = \underline{46}$

2. Rechne die kleine und die große Aufgabe.


 $6 + 2 = \underline{8}$


 $26 + 2 = \underline{28}$

$4 + 3 = \underline{7}$

$7 + 2 = \underline{9}$

$5 + 4 = \underline{9}$

$54 + 3 = \underline{57}$

$37 + 2 = \underline{39}$

$75 + 4 = \underline{79}$

$1 + 8 = \underline{9}$

$3 + 5 = \underline{8}$

$6 + 3 = \underline{9}$

$81 + 8 = \underline{89}$

$83 + 5 = \underline{88}$

$96 + 3 = \underline{99}$

3. Finde die Tauschaufgabe und rechne anschließend aus.

$4 + 42 = \underline{46}$

$6 + 63 = \underline{69}$

$5 + 54 = \underline{59}$

$42 + 4 = \underline{46}$

$\underline{63} + \underline{6} = \underline{69}$

$\underline{54} + \underline{5} = \underline{59}$

4. Rechne die Aufgaben.

$22 + 11 = \underline{33}$

$27 + 51 = \underline{78}$

$14 + 83 = \underline{97}$

$54 + 32 = \underline{86}$

$43 + 35 = \underline{78}$

$23 + 24 = \underline{47}$

$64 + 24 = \underline{88}$

$75 + 22 = \underline{97}$

$57 + 42 = \underline{99}$

$36 + 33 = \underline{69}$

$46 + 43 = \underline{89}$



Name: _____

Datum: _____

1. Rechne die Aufgaben.

$70 - 30 = \underline{\quad}$

$40 - \underline{\quad} = 20$

$20 - 6 = \underline{\quad}$

$90 - 80 = \underline{\quad}$

$60 - \underline{\quad} = 10$

$70 - 7 = \underline{\quad}$

$52 - 20 = \underline{\quad}$

$80 - \underline{\quad} = 30$

$90 - 9 = \underline{\quad}$

$64 - 40 = \underline{\quad}$

$70 - \underline{\quad} = 40$

$50 - 4 = \underline{\quad}$

2. Rechne die kleine und die große Aufgabe.

$8 - 2 = \underline{\quad}$



$28 - 2 = \underline{\quad}$

$4 - 3 = \underline{\quad}$

$7 - 2 = \underline{\quad}$

$8 - 4 = \underline{\quad}$

$64 - 3 = \underline{\quad}$

$77 - 2 = \underline{\quad}$

$38 - 4 = \underline{\quad}$

$9 - 7 = \underline{\quad}$

$6 - 5 = \underline{\quad}$

$5 - 2 = \underline{\quad}$

$59 - 7 = \underline{\quad}$

$46 - 5 = \underline{\quad}$

$95 - 2 = \underline{\quad}$

3. Rechne die Aufgaben.

$38 - 16 = \underline{\quad}$

$98 - 54 = \underline{\quad}$

$45 - 31 = \underline{\quad}$

$69 - 37 = \underline{\quad}$

$74 - 42 = \underline{\quad}$

$89 - 27 = \underline{\quad}$

$27 - 13 = \underline{\quad}$

$65 - 23 = \underline{\quad}$

$85 - 14 = \underline{\quad}$

$84 - 32 = \underline{\quad}$

$93 - 71 = \underline{\quad}$

$47 - 24 = \underline{\quad}$

$66 - 24 = \underline{\quad}$

$97 - 62 = \underline{\quad}$

$89 - 42 = \underline{\quad}$

$36 - 33 = \underline{\quad}$

$79 - 56 = \underline{\quad}$



Name: _____

Datum: _____

1. Rechne die Aufgaben.

$70 - 30 = \underline{40}$

$40 - \underline{20} = 20$

$20 - 6 = \underline{14}$

$90 - 80 = \underline{10}$

$60 - \underline{50} = 10$

$70 - 7 = \underline{63}$

$52 - 20 = \underline{32}$

$80 - \underline{50} = 30$


$90 - 9 = \underline{81}$


$64 - 40 = \underline{24}$

$70 - \underline{30} = 40$

$50 - 4 = \underline{46}$

2. Rechne die kleine und die große Aufgabe.


 $8 - 2 = \underline{6}$


 $28 - 2 = \underline{26}$

$4 - 3 = \underline{1}$

$7 - 2 = \underline{5}$

$8 - 4 = \underline{4}$

$64 - 3 = \underline{61}$

$77 - 2 = \underline{75}$

$38 - 4 = \underline{34}$

$9 - 7 = \underline{2}$

$6 - 5 = \underline{1}$

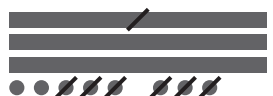
$5 - 2 = \underline{3}$

$59 - 7 = \underline{52}$

$46 - 5 = \underline{41}$

$95 - 2 = \underline{93}$

3. Rechne die Aufgaben.


 $38 - 16 = \underline{22}$

$98 - 54 = \underline{44}$

$45 - 31 = \underline{14}$

$69 - 37 = \underline{32}$

$74 - 42 = \underline{32}$

$89 - 27 = \underline{62}$

$27 - 13 = \underline{14}$

$65 - 23 = \underline{42}$

$85 - 14 = \underline{71}$

$84 - 32 = \underline{52}$

$93 - 71 = \underline{22}$

$47 - 24 = \underline{23}$

$66 - 24 = \underline{42}$

$97 - 62 = \underline{35}$

$89 - 42 = \underline{47}$

$36 - 33 = \underline{3}$

$79 - 56 = \underline{23}$



Name: _____

Datum: _____

1. Ergänze zum nächsten Zehner.

$26 + \underline{\quad} = 30$

$52 + \underline{\quad} = 60$

$77 + \underline{\quad} = 80$

2. Rechne die Aufgaben.

$40 - 9 = \underline{\quad}$

$90 - 5 = \underline{\quad}$

$50 - 3 = \underline{\quad}$

3. Rechne die Aufgaben. Rechne immer erst bis zum Zehner.

$$35 + \begin{array}{c} \boxed{7} \\ \swarrow \quad \searrow \\ 35 + \boxed{5} + \boxed{\quad} \end{array} = \underline{\quad}$$

$$\boxed{35 + \boxed{5} + \boxed{\quad}} = \underline{\quad}$$

$$43 - \begin{array}{c} \boxed{6} \\ \swarrow \quad \searrow \\ 43 - \boxed{3} - \boxed{\quad} \end{array} = \underline{\quad}$$

$$\boxed{43 - \boxed{3} - \boxed{\quad}} = \underline{\quad}$$

$$56 + \begin{array}{c} \boxed{5} \\ \swarrow \quad \searrow \\ 56 + \boxed{\quad} + \boxed{\quad} \end{array} = \underline{\quad}$$

$$\boxed{56 + \boxed{\quad} + \boxed{\quad}} = \underline{\quad}$$

$$94 - \begin{array}{c} \boxed{9} \\ \swarrow \quad \searrow \\ 94 - \boxed{\quad} - \boxed{\quad} \end{array} = \underline{\quad}$$

$$\boxed{94 - \boxed{\quad} - \boxed{\quad}} = \underline{\quad}$$

$$28 + \begin{array}{c} \boxed{8} \\ \swarrow \quad \searrow \\ 28 + \boxed{\quad} + \boxed{\quad} \end{array} = \underline{\quad}$$

$$\boxed{28 + \boxed{\quad} + \boxed{\quad}} = \underline{\quad}$$

$$71 - \begin{array}{c} \boxed{4} \\ \swarrow \quad \searrow \\ 71 - \boxed{\quad} - \boxed{\quad} \end{array} = \underline{\quad}$$

$$\boxed{71 - \boxed{\quad} - \boxed{\quad}} = \underline{\quad}$$

4. Rechne die Plus- und die Minusaufgaben.

$24 + 9 = \underline{\quad}$

$53 - 8 = \underline{\quad}$

$89 + 3 = \underline{\quad}$

$24 + 8 = \underline{\quad}$

$55 - 8 = \underline{\quad}$

$81 - 4 = \underline{\quad}$

$24 + 7 = \underline{\quad}$

$57 - 8 = \underline{\quad}$

$67 + 5 = \underline{\quad}$



Name: _____

Datum: _____

1. Ergänze zum nächsten Zehner.

$26 + \underline{4} = 30$

$52 + \underline{8} = 60$

$77 + \underline{3} = 80$

2. Rechne die Aufgaben.

$40 - 9 = \underline{31}$

$90 - 5 = \underline{85}$

$50 - 3 = \underline{47}$

3. Rechne die Aufgaben. Rechne immer erst bis zum Zehner.

$$35 + \begin{array}{|c|} \hline 7 \\ \hline \end{array} = \underline{42}$$

$$\underbrace{35 + \begin{array}{|c|} \hline 5 \\ \hline \end{array}} + \begin{array}{|c|} \hline 2 \\ \hline \end{array} = \underline{42}$$

$$43 - \begin{array}{|c|} \hline 6 \\ \hline \end{array} = \underline{37}$$

$$\underbrace{43 - \begin{array}{|c|} \hline 3 \\ \hline \end{array}} - \begin{array}{|c|} \hline 3 \\ \hline \end{array} = \underline{37}$$

$$56 + \begin{array}{|c|} \hline 5 \\ \hline \end{array} = \underline{61}$$

$$\underbrace{56 + \begin{array}{|c|} \hline 4 \\ \hline \end{array}} + \begin{array}{|c|} \hline 1 \\ \hline \end{array} = \underline{61}$$

$$94 - \begin{array}{|c|} \hline 9 \\ \hline \end{array} = \underline{85}$$

$$\underbrace{94 - \begin{array}{|c|} \hline 4 \\ \hline \end{array}} - \begin{array}{|c|} \hline 5 \\ \hline \end{array} = \underline{85}$$

$$28 + \begin{array}{|c|} \hline 8 \\ \hline \end{array} = \underline{36}$$

$$\underbrace{28 + \begin{array}{|c|} \hline 2 \\ \hline \end{array}} + \begin{array}{|c|} \hline 6 \\ \hline \end{array} = \underline{36}$$

$$71 - \begin{array}{|c|} \hline 4 \\ \hline \end{array} = \underline{67}$$

$$\underbrace{71 - \begin{array}{|c|} \hline 1 \\ \hline \end{array}} - \begin{array}{|c|} \hline 3 \\ \hline \end{array} = \underline{67}$$

4. Rechne die Plus- und die Minusaufgaben.

$24 + 9 = \underline{33}$

$53 - 8 = \underline{45}$

$89 + 3 = \underline{92}$

$24 + 8 = \underline{32}$

$55 - 8 = \underline{47}$

$81 - 4 = \underline{77}$

$24 + 7 = \underline{31}$

$57 - 8 = \underline{49}$

$67 + 5 = \underline{72}$



Name: _____

Datum: _____

1. Rechne die Plus- und die Minusaufgaben in Schritten.

$$\begin{array}{r} 34 + \boxed{28} = 62 \\ \hline 34 + \boxed{8} = \underline{\quad} \\ \downarrow \\ \underline{\quad} + \boxed{20} = \underline{\quad} \end{array}$$

$$\begin{array}{r} 69 + \boxed{17} = \underline{\quad} \\ \hline 69 + \boxed{7} = \underline{\quad} \\ \downarrow \\ \underline{\quad} + \boxed{10} = \underline{\quad} \end{array}$$

$$\begin{array}{r} 46 + \boxed{35} = \underline{\quad} \\ \hline 46 + \boxed{5} = \underline{\quad} \\ \downarrow \\ \underline{\quad} + \boxed{30} = \underline{\quad} \end{array}$$

$$\begin{array}{r} 82 - \boxed{54} = \underline{\quad} \\ \hline 82 - \boxed{4} = \underline{\quad} \\ \downarrow \\ \underline{\quad} - \boxed{50} = \underline{\quad} \end{array}$$

$$\begin{array}{r} 53 - \boxed{29} = \underline{\quad} \\ \hline 53 - \boxed{9} = \underline{\quad} \\ \downarrow \\ \underline{\quad} - \boxed{20} = \underline{\quad} \end{array}$$

$$\begin{array}{r} 71 - \boxed{44} = \underline{\quad} \\ \hline 71 - \boxed{4} = \underline{\quad} \\ \downarrow \\ \underline{\quad} - \boxed{40} = \underline{\quad} \end{array}$$

2. Rechne die Plus- und die Minusaufgaben.

$26 + 65 = \underline{\quad}$

$19 + 42 = \underline{\quad}$

$83 - 29 = \underline{\quad}$

$37 + 54 = \underline{\quad}$

$39 + 33 = \underline{\quad}$

$42 - 28 = \underline{\quad}$

$48 + 43 = \underline{\quad}$

$69 + 24 = \underline{\quad}$

$91 - 27 = \underline{\quad}$

3. Rechne die Minusaufgaben mithilfe der Ergänzungsaufgabe.

$$\begin{array}{l} 84 - 77 = \square \\ 77 + \square = 84 \end{array}$$

$$\begin{array}{l} 52 - 49 = \square \\ 49 + \square = 52 \end{array}$$

$$\begin{array}{l} 33 - 25 = \square \\ 25 + \square = 33 \end{array}$$

$$\begin{array}{l} 66 - 58 = \square \\ 58 + \square = 66 \end{array}$$



Name: _____

Datum: _____

1. Rechne die Plus- und die Minusaufgaben in Schritten.

$$\begin{array}{r} 34 + \boxed{28} = 62 \\ \hline 34 + \boxed{8} = \underline{42} \\ \downarrow \\ \underline{42} + \boxed{20} = \underline{62} \end{array}$$

$$\begin{array}{r} 69 + \boxed{17} = \mathbf{86} \\ \hline 69 + \boxed{7} = \underline{76} \\ \downarrow \\ \underline{76} + \boxed{10} = \underline{86} \end{array}$$

$$\begin{array}{r} 46 + \boxed{35} = \mathbf{81} \\ \hline 46 + \boxed{5} = \underline{51} \\ \downarrow \\ \underline{51} + \boxed{30} = \underline{81} \end{array}$$

$$\begin{array}{r} 82 - \boxed{54} = \mathbf{28} \\ \hline 82 - \boxed{4} = \underline{78} \\ \downarrow \\ \underline{78} - \boxed{50} = \underline{28} \end{array}$$

$$\begin{array}{r} 53 - \boxed{29} = \mathbf{24} \\ \hline 53 - \boxed{9} = \underline{44} \\ \downarrow \\ \underline{44} - \boxed{20} = \underline{24} \end{array}$$

$$\begin{array}{r} 71 - \boxed{44} = \mathbf{27} \\ \hline 71 - \boxed{4} = \underline{67} \\ \downarrow \\ \underline{67} - \boxed{40} = \underline{27} \end{array}$$

2. Rechne die Plus- und die Minusaufgaben.

$26 + 65 = \underline{91}$

$19 + 42 = \underline{61}$

$83 - 29 = \underline{54}$

$37 + 54 = \underline{91}$

$39 + 33 = \underline{72}$

$42 - 28 = \underline{14}$

$48 + 43 = \underline{91}$

$69 + 24 = \underline{93}$

$91 - 27 = \underline{64}$

3. Rechne die Minusaufgaben mithilfe der Ergänzungsaufgabe.

$$\begin{array}{l} 84 - 77 = \boxed{7} \\ 77 + \boxed{7} = 84 \end{array}$$

$$\begin{array}{l} 52 - 49 = \boxed{3} \\ 49 + \boxed{3} = 52 \end{array}$$

$$\begin{array}{l} 33 - 25 = \boxed{8} \\ 25 + \boxed{8} = 33 \end{array}$$

$$\begin{array}{l} 66 - 58 = \boxed{8} \\ 58 + \boxed{8} = 66 \end{array}$$



Name: _____

Datum: _____

1. Finde die Tauschaufgabe und rechne aus.

$$8 \cdot 5 = \underline{\quad}$$

$$5 \cdot \underline{\quad} = \underline{\quad}$$

$$7 \cdot 3 = \underline{\quad}$$

$$\underline{\quad} \cdot \underline{\quad} = \underline{\quad}$$

$$9 \cdot 2 = \underline{\quad}$$

$$\underline{\quad} \cdot \underline{\quad} = \underline{\quad}$$

2. Rechne die Aufgabenpaare aus.

$$5 \cdot 2 = \underline{\quad}$$

$$3 \cdot 5 = \underline{\quad}$$

$$4 \cdot 3 = \underline{\quad}$$

$$5 \cdot 4 = \underline{\quad}$$

$$3 \cdot 10 = \underline{\quad}$$

$$4 \cdot 6 = \underline{\quad}$$

$$6 \cdot 4 = \underline{\quad}$$

$$7 \cdot 5 = \underline{\quad}$$

$$8 \cdot 4 = \underline{\quad}$$

$$6 \cdot 8 = \underline{\quad}$$

$$7 \cdot 10 = \underline{\quad}$$

$$8 \cdot 8 = \underline{\quad}$$

3. Rechne die Malaufgaben.

$$6 \cdot 3 = \underline{\quad}$$

$$0 \cdot 5 = \underline{\quad}$$

$$9 \cdot 6 = \underline{\quad}$$

$$4 \cdot 8 = \underline{\quad}$$

$$7 \cdot 8 = \underline{\quad}$$

$$2 \cdot 8 = \underline{\quad}$$

$$7 \cdot 1 = \underline{\quad}$$

$$8 \cdot 3 = \underline{\quad}$$

$$5 \cdot 5 = \underline{\quad}$$

$$10 \cdot 4 = \underline{\quad}$$

$$4 \cdot 5 = \underline{\quad}$$

$$6 \cdot 7 = \underline{\quad}$$

$$7 \cdot 7 = \underline{\quad}$$

$$6 \cdot 6 = \underline{\quad}$$

$$4 \cdot 3 = \underline{\quad}$$

$$9 \cdot 3 = \underline{\quad}$$

$$3 \cdot 0 = \underline{\quad}$$

$$8 \cdot 6 = \underline{\quad}$$

$$2 \cdot 6 = \underline{\quad}$$

$$5 \cdot 9 = \underline{\quad}$$

$$9 \cdot 8 = \underline{\quad}$$

$$6 \cdot 9 = \underline{\quad}$$

$$3 \cdot 7 = \underline{\quad}$$

$$3 \cdot 9 = \underline{\quad}$$

$$3 \cdot 4 = \underline{\quad}$$

$$4 \cdot 9 = \underline{\quad}$$

$$7 \cdot 6 = \underline{\quad}$$

$$4 \cdot 6 = \underline{\quad}$$

$$7 \cdot 4 = \underline{\quad}$$

$$9 \cdot 9 = \underline{\quad}$$

$$5 \cdot 8 = \underline{\quad}$$

$$6 \cdot 5 = \underline{\quad}$$

$$7 \cdot 9 = \underline{\quad}$$

$$5 \cdot 3 = \underline{\quad}$$

$$8 \cdot 4 = \underline{\quad}$$

$$10 \cdot 10 = \underline{\quad}$$



Name: _____

Datum: _____

1. Finde die Tauschaufgabe und rechne aus.

$$8 \cdot 5 = \underline{40}$$

$$5 \cdot \underline{8} = \underline{40}$$

$$7 \cdot 3 = \underline{21}$$

$$\underline{3} \cdot \underline{7} = \underline{21}$$

$$9 \cdot 2 = \underline{18}$$

$$\underline{2} \cdot \underline{9} = \underline{18}$$

2. Rechne die Aufgabenpaare aus.

$$5 \cdot 2 = \underline{10}$$

$$3 \cdot 5 = \underline{15}$$

$$4 \cdot 3 = \underline{12}$$

$$5 \cdot 4 = \underline{20}$$

$$3 \cdot 10 = \underline{30}$$

$$4 \cdot 6 = \underline{24}$$

$$6 \cdot 4 = \underline{24}$$

$$7 \cdot 5 = \underline{35}$$

$$8 \cdot 4 = \underline{32}$$

$$6 \cdot 8 = \underline{48}$$

$$7 \cdot 10 = \underline{70}$$

$$8 \cdot 8 = \underline{64}$$

3. Rechne die Malaufgaben.

$$6 \cdot 3 = \underline{18}$$

$$0 \cdot 5 = \underline{0}$$

$$9 \cdot 6 = \underline{54}$$

$$4 \cdot 8 = \underline{32}$$

$$7 \cdot 8 = \underline{56}$$

$$2 \cdot 8 = \underline{16}$$

$$7 \cdot 1 = \underline{7}$$

$$8 \cdot 3 = \underline{24}$$

$$5 \cdot 5 = \underline{25}$$

$$10 \cdot 4 = \underline{40}$$

$$4 \cdot 5 = \underline{20}$$

$$6 \cdot 7 = \underline{42}$$

$$7 \cdot 7 = \underline{49}$$

$$6 \cdot 6 = \underline{36}$$

$$4 \cdot 3 = \underline{12}$$

$$9 \cdot 3 = \underline{27}$$

$$3 \cdot 0 = \underline{0}$$

$$8 \cdot 6 = \underline{48}$$

$$2 \cdot 6 = \underline{12}$$

$$5 \cdot 9 = \underline{45}$$

$$9 \cdot 8 = \underline{72}$$

$$6 \cdot 9 = \underline{54}$$

$$3 \cdot 7 = \underline{21}$$

$$3 \cdot 9 = \underline{27}$$

$$3 \cdot 4 = \underline{12}$$

$$4 \cdot 9 = \underline{36}$$

$$7 \cdot 6 = \underline{42}$$

$$4 \cdot 6 = \underline{24}$$

$$7 \cdot 4 = \underline{28}$$

$$9 \cdot 9 = \underline{81}$$

$$5 \cdot 8 = \underline{40}$$

$$6 \cdot 5 = \underline{30}$$

$$7 \cdot 9 = \underline{63}$$

$$5 \cdot 3 = \underline{15}$$

$$8 \cdot 4 = \underline{32}$$

$$10 \cdot 10 = \underline{100}$$




Name: _____

Datum: _____

1. Rechne aus.

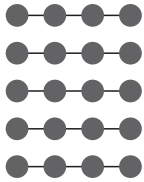
$$32 : 4 = \underline{\quad}$$



$$30 : 5 = \underline{\quad}$$

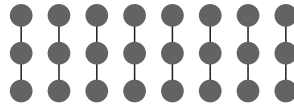


$$15 : 3 = \underline{\quad}$$

2. Rechne die Geteiltaufgaben mithilfe der Malaufgabe.

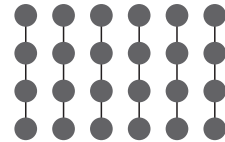
$$\underline{\quad} \cdot 4 = 20$$

$$20 : 4 = \underline{\quad}$$



$$\underline{\quad} \cdot 3 = 24$$

$$24 : 3 = \underline{\quad}$$



$$\underline{\quad} \cdot 4 = 24$$

$$24 : 4 = \underline{\quad}$$

3. Nutze die Malaufgabe beim Lösen.

$$32 : 4 = \underline{\quad}$$

$$\underline{\quad} \cdot 4 = 32$$

$$16 : 8 = \underline{\quad}$$

$$\underline{\quad} \cdot 8 = 16$$

$$27 : 9 = \underline{\quad}$$

$$\underline{\quad} \cdot 9 = 27$$

$$48 : 8 = \underline{\quad}$$

$$\underline{\quad} \cdot 8 = 48$$

$$35 : 7 = \underline{\quad}$$

$$\underline{\quad} \cdot 7 = 35$$

$$72 : 9 = \underline{\quad}$$

$$\underline{\quad} \cdot 9 = 72$$

4. Rechne die Geteiltaufgaben.

$$35 : 5 = \underline{\quad}$$

$$18 : 3 = \underline{\quad}$$

$$32 : 4 = \underline{\quad}$$

$$49 : 7 = \underline{\quad}$$

$$80 : 8 = \underline{\quad}$$

$$81 : 9 = \underline{\quad}$$

$$54 : 9 = \underline{\quad}$$

$$54 : 6 = \underline{\quad}$$

$$9 : 9 = \underline{\quad}$$




Name: _____

Datum: _____

1. Rechne aus.

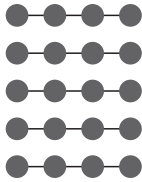
$$32 : 4 = \underline{8}$$



$$30 : 5 = \underline{6}$$

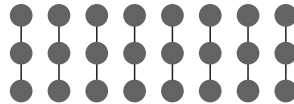


$$15 : 3 = \underline{5}$$

2. Rechne die Geteiltaufgaben mithilfe der Malaufgabe.

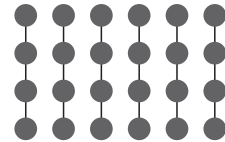
$$\underline{5} \cdot 4 = 20$$

$$20 : 4 = \underline{5}$$



$$\underline{8} \cdot 3 = 24$$

$$24 : 3 = \underline{8}$$



$$\underline{6} \cdot 4 = 24$$

$$24 : 4 = \underline{6}$$

3. Nutze die Malaufgabe beim Lösen.

$$32 : 4 = \underline{8}$$

$$\underline{8} \cdot 4 = 32$$

$$16 : 8 = \underline{2}$$

$$\underline{2} \cdot 8 = 16$$

$$27 : 9 = \underline{3}$$

$$\underline{3} \cdot 9 = 27$$

$$48 : 8 = \underline{6}$$

$$\underline{6} \cdot 8 = 48$$

$$35 : 7 = \underline{5}$$

$$\underline{5} \cdot 7 = 35$$

$$72 : 9 = \underline{8}$$

$$\underline{8} \cdot 9 = 72$$

4. Rechne die Geteiltaufgaben.

$$35 : 5 = \underline{7}$$

$$18 : 3 = \underline{6}$$

$$32 : 4 = \underline{8}$$

$$49 : 7 = \underline{7}$$

$$80 : 8 = \underline{10}$$

$$81 : 9 = \underline{9}$$

$$54 : 9 = \underline{6}$$

$$54 : 6 = \underline{9}$$

$$9 : 9 = \underline{1}$$